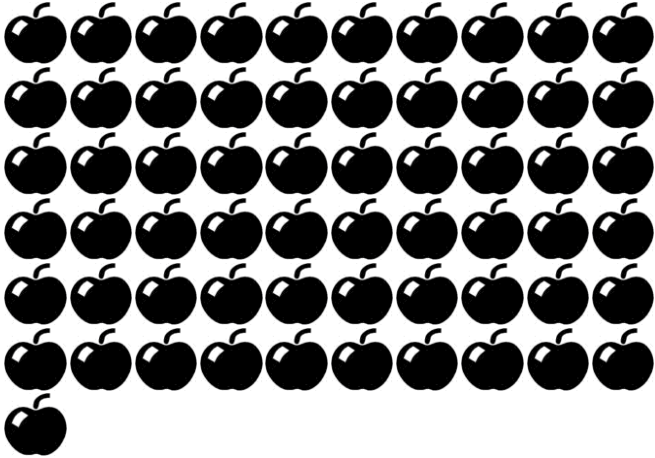
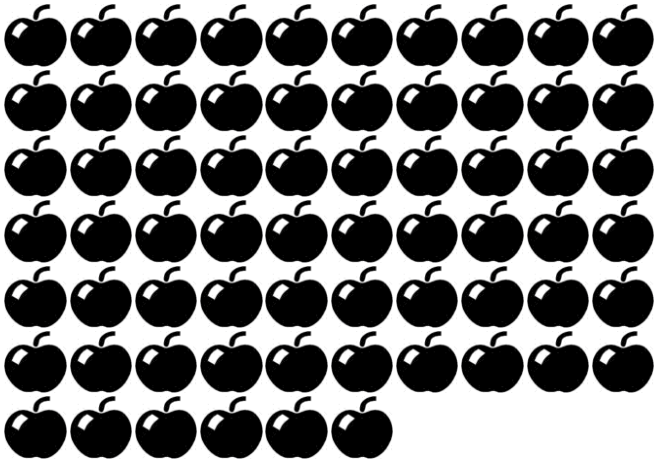




Name: \_\_\_\_\_


Count how many.


1)  =

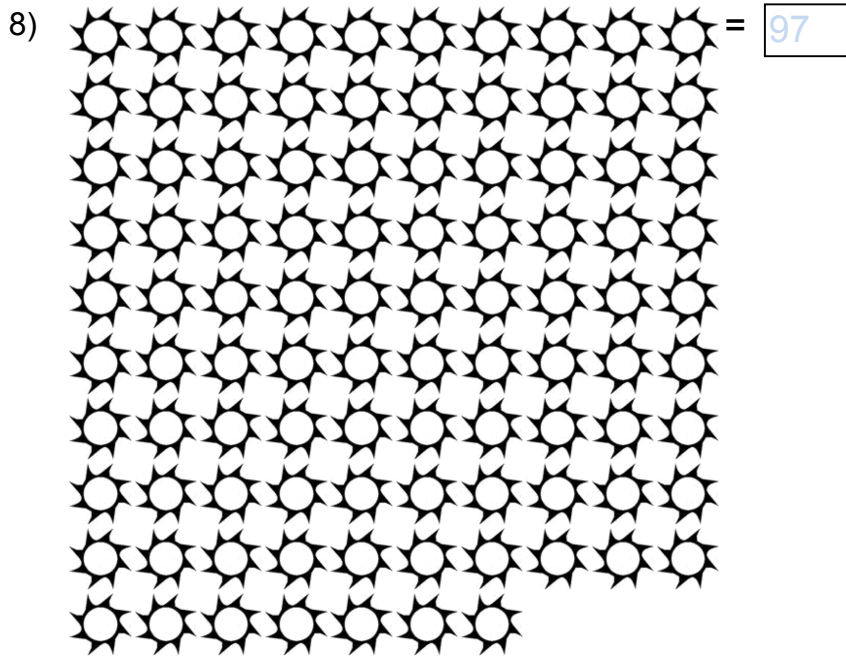

2)  =

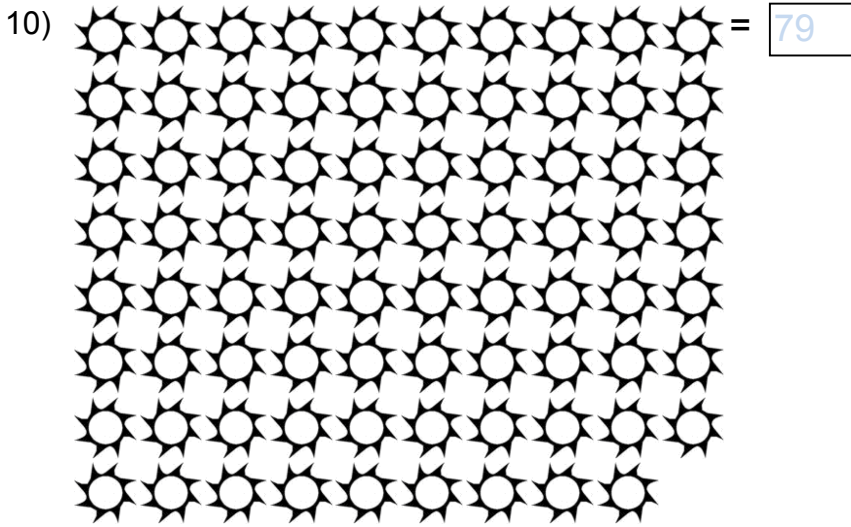

3)  =

4)  =

5)  =

6)  =





Complete the table.

11) Count by 1 from 51 to 100

51	52	53	54	55
56	57	58	59	60
61	62	63	64	65
66	67	68	69	70
71	72	73	74	75
76	77	78	79	80
81	82	83	84	85
86	87	88	89	90
91	92	93	94	95
96	97	98	99	100

Fill in the missing numbers.

12)

61	60	59	58	57	56	55	54	53	52
----	----	----	----	----	----	----	----	----	----

13) 

63	64	65	66	67	68	69	70	71	72
----	----	----	----	----	----	----	----	----	----

14) 

71	72	73	74	75	76	77	78	79	80
----	----	----	----	----	----	----	----	----	----

15) 

77	78	79	80	81	82	83	84	85	86
----	----	----	----	----	----	----	----	----	----

16) 

68	69	70	71	72	73	74	75	76	77
----	----	----	----	----	----	----	----	----	----

17) 

66	67	68	69	70	71	72	73	74	75
----	----	----	----	----	----	----	----	----	----

18) 

50	51	52	53	54	55	56	57	58	59
----	----	----	----	----	----	----	----	----	----

19) 

76	77	78	79	80	81	82	83	84	85
----	----	----	----	----	----	----	----	----	----

20) 

73	74	75	76	77	78	79	80	81	82
----	----	----	----	----	----	----	----	----	----

21) 

53	54	55	56	57	58	59	60	61	62
----	----	----	----	----	----	----	----	----	----

22) 

83	84	85	86	87	88	89	90	91	92
----	----	----	----	----	----	----	----	----	----

23) 

85	86	87	88	89	90	91	92	93	94
----	----	----	----	----	----	----	----	----	----

24)

81	82	83	84	85	86	87	88	89	90
----	----	----	----	----	----	----	----	----	----

25)

51	52	53	54	55	56	57	58	59	60
----	----	----	----	----	----	----	----	----	----

26)

72	73	74	75	76	77	78	79	80	81
----	----	----	----	----	----	----	----	----	----

27)

55	56	57	58	59	60	61	62	63	64
----	----	----	----	----	----	----	----	----	----

28)

52	53	54	55	56	57	58	59	60	61
----	----	----	----	----	----	----	----	----	----

29)

69	70	71	72	73	74	75	76	77	78
----	----	----	----	----	----	----	----	----	----

30)

89	90	91	92	93	94	95	96	97	98
----	----	----	----	----	----	----	----	----	----

31)

67	68	69	70	71	72	73	74	75	76
----	----	----	----	----	----	----	----	----	----

Complete the counting tables.

32) Count by 7 from 8 to 71

8	15	22	29	36	43	50	57	64	71
---	----	----	----	----	----	----	----	----	----

33) Count by 6 from 7 to 61

7	13	19	25	31	37	43	49	55	61
---	----	----	----	----	----	----	----	----	----



34) Count by 7 from 3 to 66

3	10	17	24	31	38	45	52	59	66
---	----	----	----	----	----	----	----	----	----

35) Count by 2 from 3 to 21

3	5	7	9	11	13	15	17	19	21
---	---	---	---	----	----	----	----	----	----

36) Count by 6 from 2 to 56

2	8	14	20	26	32	38	44	50	56
---	---	----	----	----	----	----	----	----	----

37) Count by 2 from 2 to 20

2	4	6	8	10	12	14	16	18	20
---	---	---	---	----	----	----	----	----	----

38) Count by 7 from 5 to 68

5	12	19	26	33	40	47	54	61	68
---	----	----	----	----	----	----	----	----	----

39) Count by 8 from 7 to 79

7	15	23	31	39	47	55	63	71	79
---	----	----	----	----	----	----	----	----	----

40) Count by 7 from 2 to 65

2	9	16	23	30	37	44	51	58	65
---	---	----	----	----	----	----	----	----	----

41) Count by 9 from 5 to 86

5	14	23	32	41	50	59	68	77	86
---	----	----	----	----	----	----	----	----	----