


Name: _____

Count how many.

1.  =

2.  =


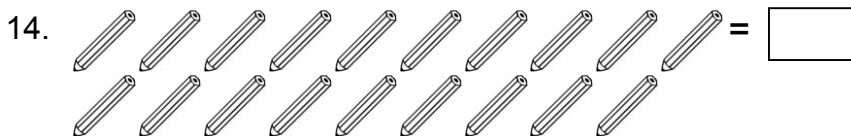



3.  =



4.  =

5.  =

6.  =

7.  =





Fill in the missing numbers.

21.

		13	12	
--	--	----	----	--

22.

	17			20
--	----	--	--	----

23.

			9	8
--	--	--	---	---

24.

10			7	
----	--	--	---	--

25.

13				17
----	--	--	--	----

26.

11			8	
----	--	--	---	--

27.

20			17	
----	--	--	----	--

28.

17				13
----	--	--	--	----

29.

	13	12		
--	----	----	--	--

30.

18			15	
----	--	--	----	--

31.

	18		16	
--	----	--	----	--

32.

			16	17
--	--	--	----	----

33.

19	18			
----	----	--	--	--

34.

	19		17	
--	----	--	----	--

35.

14	15			
----	----	--	--	--

36.

	11			8
--	----	--	--	---

37.

			18	19
--	--	--	----	----

38.

			15	16
--	--	--	----	----

39.

		16		14
--	--	----	--	----

40.

11		13		
----	--	----	--	--

41.

	14		16	
--	----	--	----	--

42.

14				10
----	--	--	--	----

43.

	11			14
--	----	--	--	----

44.

		16	15	
--	--	----	----	--

45.

		15		13
--	--	----	--	----

46.

		9		7
--	--	---	--	---

47.

17				13
----	--	--	--	----

48.

	13		15	
--	----	--	----	--

49.

17			14	
----	--	--	----	--

50.

11				7
----	--	--	--	---

