

Count how many.

1)  =

2)  =

3)  =

4)  =

5)  =

6)  =

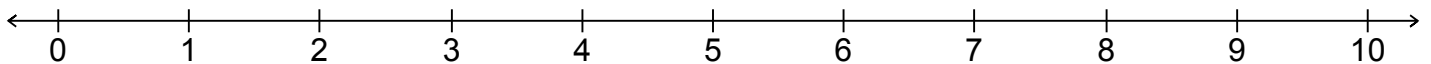
7)  =

8)  =

9)  =

10)  =

11)  =



Fill in the missing numbers.

12)

10	9	8	7	6	5	4	3	2	1
----	---	---	---	---	---	---	---	---	---

13)

1	2	3	4	5	6	7	8	9	10
---	---	---	---	---	---	---	---	---	----

14)

1	2	3	4	5	6	7	8	9	10
---	---	---	---	---	---	---	---	---	----

15)

1	2	3	4	5	6	7	8	9	10
---	---	---	---	---	---	---	---	---	----

16)

1	2	3	4	5	6	7	8	9	10
---	---	---	---	---	---	---	---	---	----

17)

10	9	8	7	6	5	4	3	2	1
----	---	---	---	---	---	---	---	---	---

18)

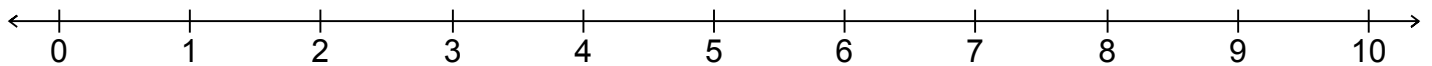
1	2	3	4	5	6	7	8	9	10
---	---	---	---	---	---	---	---	---	----

19)

10	9	8	7	6	5	4	3	2	1
----	---	---	---	---	---	---	---	---	---

20)

1	2	3	4	5	6	7	8	9	10
---	---	---	---	---	---	---	---	---	----



Fill in the missing numbers.

21)

10	9	8	7	6	5
----	---	---	---	---	---

22)

1	2	3	4	5	6
---	---	---	---	---	---

23)

1	2	3	4	5	6
---	---	---	---	---	---

24)

1	2	3	4	5	6
---	---	---	---	---	---

25)

10	9	8	7	6	5
----	---	---	---	---	---

26)

1	2	3	4	5	6
---	---	---	---	---	---

27)

10	9	8	7	6	5
----	---	---	---	---	---

28)

10	9	8	7	6	5
----	---	---	---	---	---

29)

1	2	3	4	5	6
---	---	---	---	---	---

30)

1	2	3	4	5	6
---	---	---	---	---	---

31)

1	2	3	4	5	6
---	---	---	---	---	---

32)

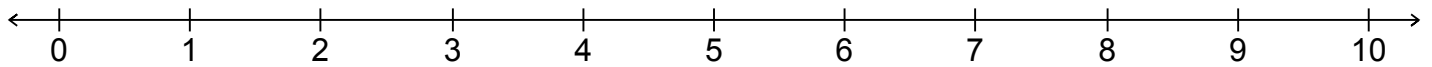
10	9	8	7	6	5
----	---	---	---	---	---

33)



1	2	3	4	5	6
---	---	---	---	---	---

34)

1	2	3	4	5	6
---	---	---	---	---	---




Add.

35)  +  =


36)  +  =



37)  +  =


38)  +  =



39)  +  =

40)  +  =



41)  +  =

42)  +  =



43)  +  =



44)  +  =

45)  +  =

46)  +  =

47)  +  =

48)  +  =

49)  +  =

50)  +  =

51)  +  =

52)  +  =

53)  +  =

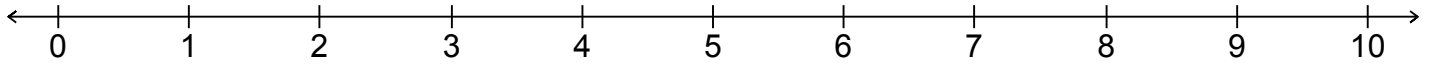
54)  +  =

55)  +  =

56)  +  =

57)  +  =

58)  +  =



Find the sum

$$\begin{array}{r} 59) \quad 5 \\ + \quad 1 \\ \hline \quad 6 \\ \hline \end{array}$$

$$\begin{array}{r} 60) \quad 4 \\ + \quad 1 \\ \hline \quad 5 \\ \hline \end{array}$$

$$\begin{array}{r} 61) \quad 3 \\ + \quad 4 \\ \hline \quad 7 \\ \hline \end{array}$$

$$\begin{array}{r} 62) \quad 3 \\ + \quad 2 \\ \hline \quad 5 \\ \hline \end{array}$$

$$\begin{array}{r} 63) \quad 1 \\ + \quad 1 \\ \hline \quad 2 \\ \hline \end{array}$$

$$\begin{array}{r} 64) \quad 4 \\ + \quad 2 \\ \hline \quad 6 \\ \hline \end{array}$$

$$\begin{array}{r} 65) \quad 2 \\ + \quad 2 \\ \hline \quad 4 \\ \hline \end{array}$$

$$\begin{array}{r} 66) \quad 3 \\ + \quad 0 \\ \hline \quad 3 \\ \hline \end{array}$$

$$\begin{array}{r} 67) \quad 1 \\ + \quad 3 \\ \hline \quad 4 \\ \hline \end{array}$$

$$\begin{array}{r} 68) \quad 5 \\ + \quad 4 \\ \hline \quad 9 \\ \hline \end{array}$$

$$\begin{array}{r} 69) \quad 3 \\ + \quad 1 \\ \hline \quad 4 \\ \hline \end{array}$$

$$\begin{array}{r} 70) \quad 2 \\ + \quad 1 \\ \hline \quad 3 \\ \hline \end{array}$$

$$\begin{array}{r} 71) \quad 2 \\ + \quad 5 \\ \hline \quad 7 \\ \hline \end{array}$$

$$\begin{array}{r} 72) \quad 1 \\ + \quad 2 \\ \hline \quad 3 \\ \hline \end{array}$$

$$\begin{array}{r} 73) \quad 3 \\ + \quad 5 \\ \hline \quad 8 \\ \hline \end{array}$$

$$\begin{array}{r} 74) \quad 3 \\ + \quad 3 \\ \hline \quad 6 \\ \hline \end{array}$$

$$\begin{array}{r} 75) \quad 2 \\ + \quad 4 \\ \hline \quad 6 \\ \hline \end{array}$$

$$\begin{array}{r} 76) \quad 4 \\ + \quad 4 \\ \hline \quad 8 \\ \hline \end{array}$$

$$\begin{array}{r} 77) \quad 4 \\ + \quad 0 \\ \hline \quad 4 \\ \hline \end{array}$$

$$\begin{array}{r} 78) \quad 0 \\ + \quad 1 \\ \hline \quad 1 \\ \hline \end{array}$$

$$\begin{array}{r} 79) \quad 5 \\ + \quad 0 \\ \hline \quad 5 \\ \hline \end{array}$$

$$\begin{array}{r} 80) \quad 4 \\ + \quad 3 \\ \hline \quad 7 \\ \hline \end{array}$$

$$\begin{array}{r} 81) \quad 2 \\ + \quad 3 \\ \hline \quad 5 \\ \hline \end{array}$$

$$\begin{array}{r} 82) \quad 2 \\ + \quad 0 \\ \hline \quad 2 \\ \hline \end{array}$$

$$\begin{array}{r} 83) \quad 0 \\ + \quad 4 \\ \hline \quad 4 \\ \hline \end{array}$$

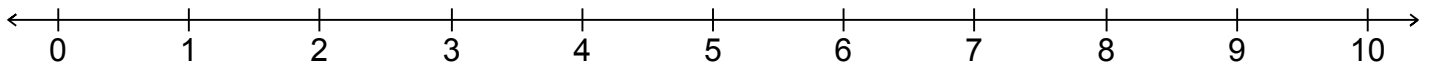
$$\begin{array}{r} 84) \quad 1 \\ + \quad 4 \\ \hline \quad 5 \\ \hline \end{array}$$

$$\begin{array}{r} 85) \quad 5 \\ + \quad 2 \\ \hline \quad 7 \\ \hline \end{array}$$

$$\begin{array}{r} 86) \quad 5 \\ + \quad 5 \\ \hline \quad 10 \\ \hline \end{array}$$

$$\begin{array}{r} 87) \quad 0 \\ + \quad 5 \\ \hline \quad 5 \\ \hline \end{array}$$

$$\begin{array}{r} 88) \quad 4 \\ + \quad 5 \\ \hline \quad 9 \\ \hline \end{array}$$



Find the difference.

$$\begin{array}{r} 89) \quad 6 \\ - 6 \\ \hline 0 \end{array}$$

$$\begin{array}{r} 90) \quad 2 \\ - 1 \\ \hline 1 \end{array}$$

$$\begin{array}{r} 91) \quad 4 \\ - 2 \\ \hline 2 \end{array}$$

$$\begin{array}{r} 92) \quad 8 \\ - 6 \\ \hline 2 \end{array}$$

$$\begin{array}{r} 93) \quad 7 \\ - 3 \\ \hline 4 \end{array}$$

$$\begin{array}{r} 94) \quad 6 \\ - 3 \\ \hline 3 \end{array}$$

$$\begin{array}{r} 95) \quad 2 \\ - 2 \\ \hline 0 \end{array}$$

$$\begin{array}{r} 96) \quad 5 \\ - 2 \\ \hline 3 \end{array}$$

$$\begin{array}{r} 97) \quad 3 \\ - 2 \\ \hline 1 \end{array}$$

$$\begin{array}{r} 98) \quad 6 \\ - 2 \\ \hline 4 \end{array}$$

$$\begin{array}{r} 99) \quad 8 \\ - 2 \\ \hline 6 \end{array}$$

$$\begin{array}{r} 100) \quad 8 \\ - 3 \\ \hline 5 \end{array}$$

$$\begin{array}{r} 101) \quad 10 \\ - 8 \\ \hline 2 \end{array}$$

$$\begin{array}{r} 102) \quad 9 \\ - 5 \\ \hline 4 \end{array}$$

$$\begin{array}{r} 103) \quad 3 \\ - 3 \\ \hline 0 \end{array}$$

$$\begin{array}{r} 104) \quad 6 \\ - 1 \\ \hline 5 \end{array}$$

$$\begin{array}{r} 105) \quad 9 \\ - 6 \\ \hline 3 \end{array}$$

$$\begin{array}{r} 106) \quad 1 \\ - 1 \\ \hline 0 \end{array}$$

$$\begin{array}{r} 107) \quad 3 \\ - 1 \\ \hline 2 \end{array}$$

$$\begin{array}{r} 108) \quad 10 \\ - 1 \\ \hline 9 \end{array}$$

$$\begin{array}{r} 109) \quad 7 \\ - 4 \\ \hline 3 \end{array}$$

$$\begin{array}{r} 110) \quad 7 \\ - 2 \\ \hline 5 \end{array}$$

$$\begin{array}{r} 111) \quad 5 \\ - 3 \\ \hline 2 \end{array}$$

$$\begin{array}{r} 112) \quad 6 \\ - 4 \\ \hline 2 \end{array}$$

$$\begin{array}{r} 113) \quad 10 \\ - 6 \\ \hline 4 \end{array}$$

$$\begin{array}{r} 114) \quad 8 \\ - 5 \\ \hline 3 \end{array}$$

$$\begin{array}{r} 115) \quad 7 \\ - 1 \\ \hline 6 \end{array}$$

$$\begin{array}{r} 116) \quad 7 \\ - 5 \\ \hline 2 \end{array}$$

$$\begin{array}{r} 117) \quad 9 \\ - 2 \\ \hline 7 \end{array}$$

$$\begin{array}{r} 118) \quad 5 \\ - 5 \\ \hline 0 \end{array}$$

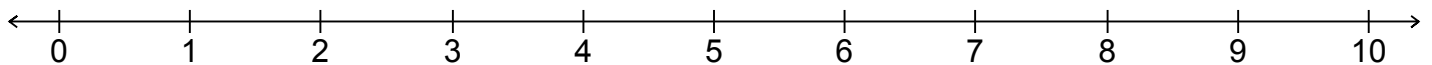
$$\begin{array}{r} 119) \quad 7 \\ - 6 \\ \hline 1 \end{array}$$

$$\begin{array}{r} 120) \quad 4 \\ - 4 \\ \hline 0 \end{array}$$

$$\begin{array}{r} 121) \quad 5 \\ - 1 \\ \hline 4 \end{array}$$

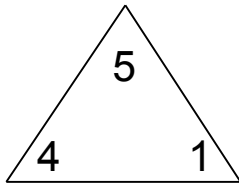
$$\begin{array}{r} 122) \quad 9 \\ - 8 \\ \hline 1 \end{array}$$

$$\begin{array}{r} 123) \quad 10 \\ - 2 \\ \hline 8 \end{array}$$



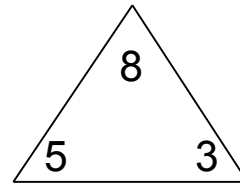
Complete each family of facts.

124)



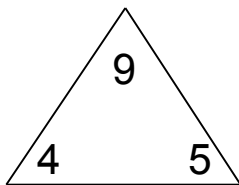
$$\begin{array}{r} \boxed{4} + \boxed{1} = \boxed{5} \\ \boxed{1} + \boxed{4} = \boxed{5} \\ \boxed{5} - \boxed{4} = \boxed{1} \\ \boxed{5} - \boxed{1} = \boxed{4} \end{array}$$

125)



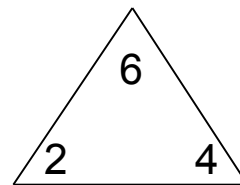
$$\begin{array}{r} \boxed{5} + \boxed{3} = \boxed{8} \\ \boxed{3} + \boxed{5} = \boxed{8} \\ \boxed{8} - \boxed{5} = \boxed{3} \\ \boxed{8} - \boxed{3} = \boxed{5} \end{array}$$

126)



$$\begin{array}{r} \boxed{4} + \boxed{5} = \boxed{9} \\ \boxed{5} + \boxed{4} = \boxed{9} \\ \boxed{9} - \boxed{4} = \boxed{5} \\ \boxed{9} - \boxed{5} = \boxed{4} \end{array}$$

127)



$$\begin{array}{r} \boxed{2} + \boxed{4} = \boxed{6} \\ \boxed{4} + \boxed{2} = \boxed{6} \\ \boxed{6} - \boxed{2} = \boxed{4} \\ \boxed{6} - \boxed{4} = \boxed{2} \end{array}$$

